







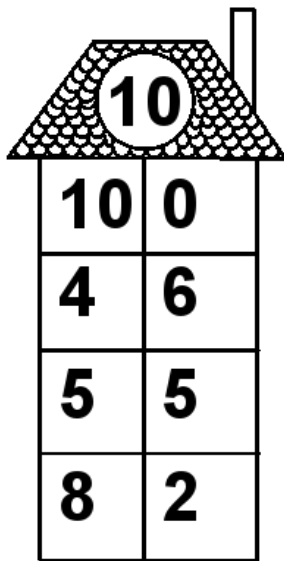
Rechenhäuser.

Name:	Klasse:	Datum:
-------	---------	--------




Rechenhäuser.

Lösungen




A house-shaped grid with a target number 10 in the roof. The grid consists of a 4x2 table of numbers.

10	
10	0
4	6
5	5
8	2




A house-shaped grid with a target number 13 in the roof. The grid consists of a 4x2 table of numbers.

13	
1	12
11	2
2	11
10	3




A house-shaped grid with a target number 15 in the roof. The grid consists of a 4x2 table of numbers.

15	
13	2
14	1
2	13
12	3




A house-shaped grid with a target number 18 in the roof. The grid consists of a 4x2 table of numbers.

18	
3	15
6	12
14	4
12	6



A house-shaped grid with a target number 19 in the roof. The grid consists of a 4x2 table of numbers.

19	
19	0
16	3
3	16
7	12



A house-shaped grid with a target number 20 in the roof. The grid consists of a 4x2 table of numbers.

20	
12	8
4	16
1	19
5	15