




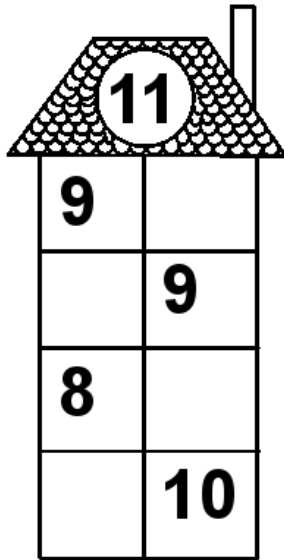


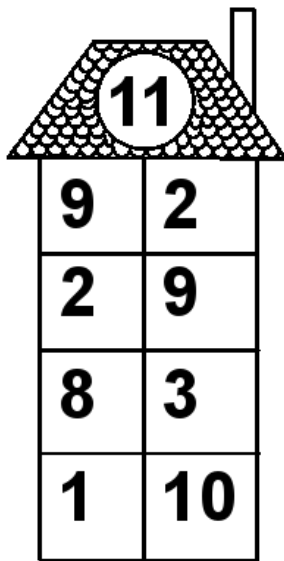
Rechenhäuser.

Name:	Klasse:	Datum:
-------	---------	--------




Rechenhäuser.

Lösungen




A house-shaped grid with a target number 11 in the roof. The grid consists of a 4x2 table of numbers.

11	
9	2
2	9
8	3
1	10




A house-shaped grid with a target number 13 in the roof. The grid consists of a 4x2 table of numbers.

13	
2	11
12	1
11	2
1	12




A house-shaped grid with a target number 16 in the roof. The grid consists of a 4x2 table of numbers.

16	
11	5
12	4
4	12
2	14




A house-shaped grid with a target number 18 in the roof. The grid consists of a 4x2 table of numbers.

18	
17	1
4	14
6	12
16	2



A house-shaped grid with a target number 19 in the roof. The grid consists of a 4x2 table of numbers.

19	
13	6
14	5
2	17
4	15



A house-shaped grid with a target number 20 in the roof. The grid consists of a 4x2 table of numbers.

20	
12	8
14	6
7	13
18	2