



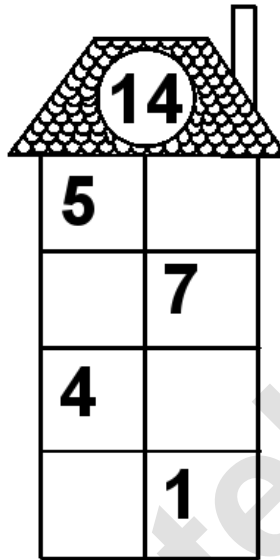
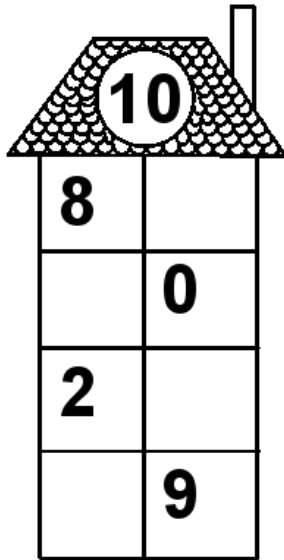


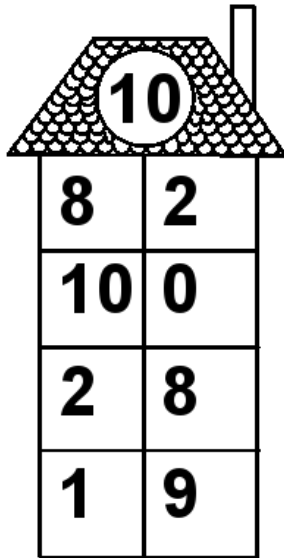
Rechenhäuser.

Name:	Klasse:	Datum:
-------	---------	--------



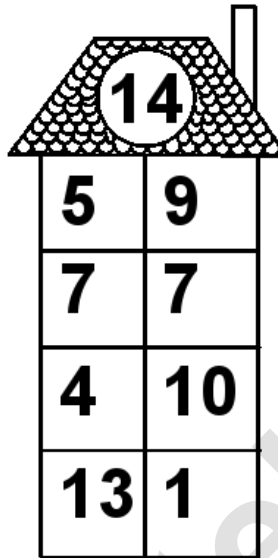
Rechenhäuser.

Lösungen




A house-shaped grid with a target number 10 in the roof. The grid consists of a 4x2 table of numbers.

10	
8	2
10	0
2	8
1	9




A house-shaped grid with a target number 14 in the roof. The grid consists of a 4x2 table of numbers.

14	
5	9
7	7
4	10
13	1




A house-shaped grid with a target number 17 in the roof. The grid consists of a 4x2 table of numbers.

17	
12	5
17	0
6	11
8	9




A house-shaped grid with a target number 18 in the roof. The grid consists of a 4x2 table of numbers.

18	
15	3
9	9
8	10
1	17



A house-shaped grid with a target number 19 in the roof. The grid consists of a 4x2 table of numbers.

19	
11	8
14	5
16	3
3	16



A house-shaped grid with a target number 20 in the roof. The grid consists of a 4x2 table of numbers.

20	
1	19
5	15
12	8
20	0