

Rechenhäuser.

Name:	Klasse:	Datum:
-------	---------	--------

House-shaped math problem with target number 12 in the roof. The body is a 4x2 grid:

7	
	10
3	
	3

House-shaped math problem with target number 15 in the roof. The body is a 4x2 grid:

1	
	11
12	
	1

House-shaped math problem with target number 17 in the roof. The body is a 4x2 grid:

5	
	1
11	
	14

House-shaped math problem with target number 18 in the roof. The body is a 4x2 grid:

5	
	16
15	
	12

House-shaped math problem with target number 19 in the roof. The body is a 4x2 grid:


4	
	16
16	
	14

House-shaped math problem with target number 20 in the roof. The body is a 4x2 grid:

11	
	6
7	
	1


Rechenhäuser.

Lösungen



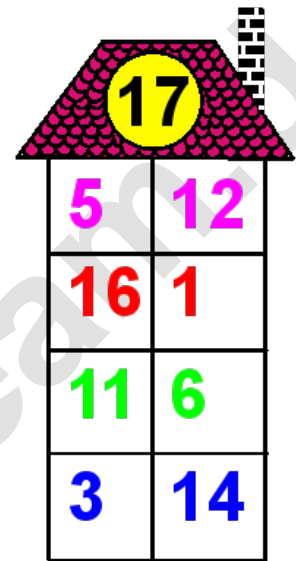
A house-shaped grid with a red roof and a chimney. The number 12 is in a yellow circle on the roof. The body is a 4x2 grid of colored numbers.

7	5
2	10
3	9
9	3




A house-shaped grid with a red roof and a chimney. The number 15 is in a yellow circle on the roof. The body is a 4x2 grid of colored numbers.

1	14
4	11
12	3
14	1




A house-shaped grid with a red roof and a chimney. The number 17 is in a yellow circle on the roof. The body is a 4x2 grid of colored numbers.

5	12
16	1
11	6
3	14




A house-shaped grid with a red roof and a chimney. The number 18 is in a yellow circle on the roof. The body is a 4x2 grid of colored numbers.

5	13
2	16
15	3
6	12



A house-shaped grid with a red roof and a chimney. The number 19 is in a yellow circle on the roof. The body is a 4x2 grid of colored numbers.

4	15
3	16
16	3
5	14



A house-shaped grid with a red roof and a chimney. The number 20 is in a yellow circle on the roof. The body is a 4x2 grid of colored numbers.

11	9
14	6
7	13
19	1