


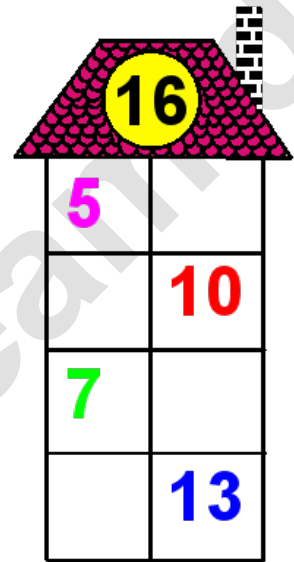




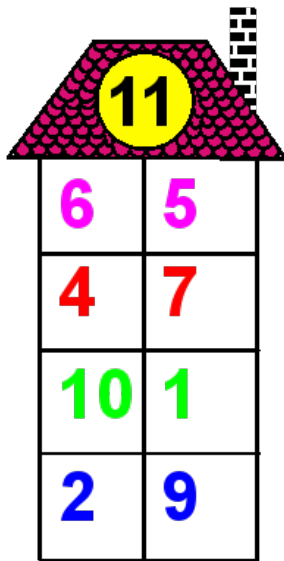
Rechenhäuser.

Name:	Klasse:	Datum:
-------	---------	--------




Rechenhäuser.

Lösungen



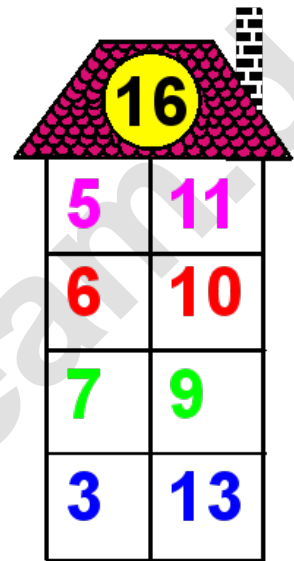
A house-shaped grid with a red dotted roof and a yellow circle containing the number 11. The body is a 4x2 grid of colored numbers.

6	5
4	7
10	1
2	9




A house-shaped grid with a red dotted roof and a yellow circle containing the number 15. The body is a 4x2 grid of colored numbers.

1	14
12	3
14	1
4	11



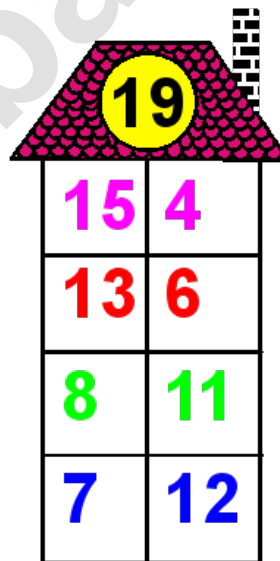
A house-shaped grid with a red dotted roof and a yellow circle containing the number 16. The body is a 4x2 grid of colored numbers.

5	11
6	10
7	9
3	13



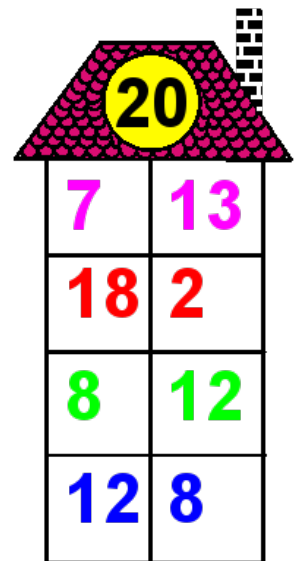
A house-shaped grid with a red dotted roof and a yellow circle containing the number 18. The body is a 4x2 grid of colored numbers.

8	10
3	15
2	16
13	5



A house-shaped grid with a red dotted roof and a yellow circle containing the number 19. The body is a 4x2 grid of colored numbers.

15	4
13	6
8	11
7	12



A house-shaped grid with a red dotted roof and a yellow circle containing the number 20. The body is a 4x2 grid of colored numbers.

7	13
18	2
8	12
12	8