







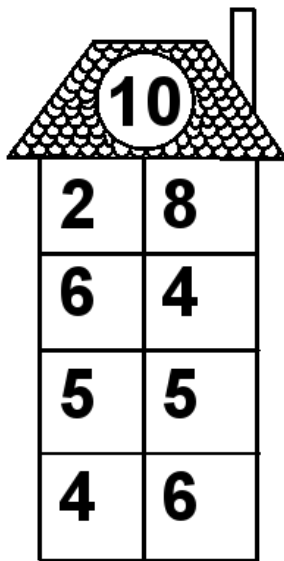
Rechenhäuser.

Name:	Klasse:	Datum:
-------	---------	--------




Rechenhäuser.

Lösungen




A house-shaped grid with a target number 10 in the roof. The grid consists of a 4x2 table of numbers.

10	
2	8
6	4
5	5
4	6




A house-shaped grid with a target number 15 in the roof. The grid consists of a 4x2 table of numbers.

15	
1	14
3	12
10	5
9	6




A house-shaped grid with a target number 17 in the roof. The grid consists of a 4x2 table of numbers.

17	
11	6
13	4
2	15
3	14




A house-shaped grid with a target number 18 in the roof. The grid consists of a 4x2 table of numbers.

18	
15	3
11	7
6	12
10	8



A house-shaped grid with a target number 19 in the roof. The grid consists of a 4x2 table of numbers.

19	
10	9
6	13
18	1
12	7



A house-shaped grid with a target number 20 in the roof. The grid consists of a 4x2 table of numbers.

20	
9	11
1	19
14	6
20	0