


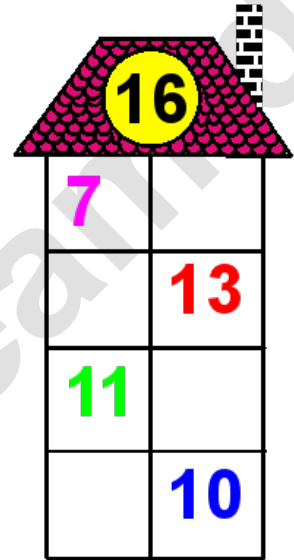





Rechenhäuser.

Name:	Klasse:	Datum:
-------	---------	--------



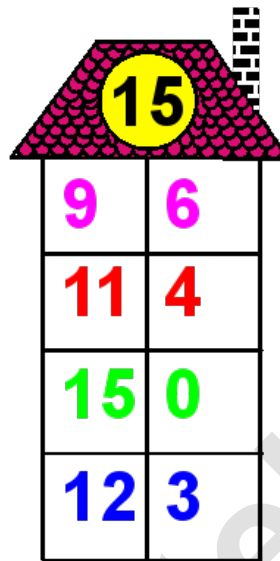
Rechenhäuser.

Lösungen



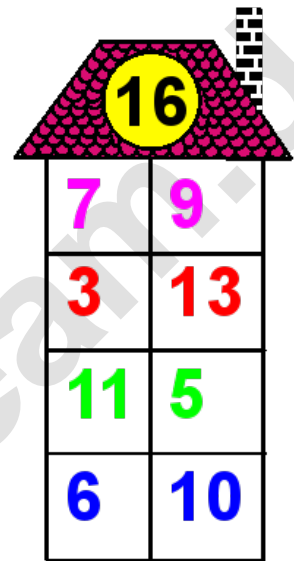
A house-shaped grid with a red patterned roof and a yellow circle containing the number 12. The grid is a 4x2 table with numbers in various colors.

7	5
4	8
9	3
1	11



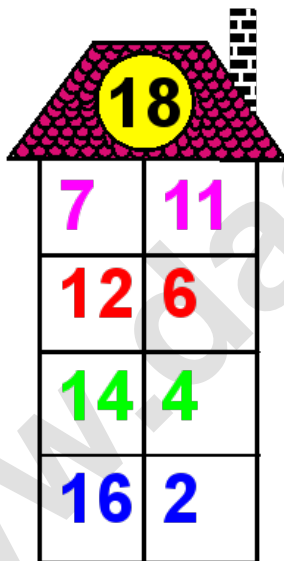
A house-shaped grid with a red patterned roof and a yellow circle containing the number 15. The grid is a 4x2 table with numbers in various colors.

9	6
11	4
15	0
12	3




A house-shaped grid with a red patterned roof and a yellow circle containing the number 16. The grid is a 4x2 table with numbers in various colors.

7	9
3	13
11	5
6	10



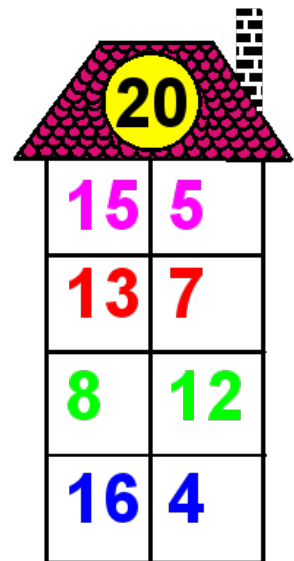
A house-shaped grid with a red patterned roof and a yellow circle containing the number 18. The grid is a 4x2 table with numbers in various colors.

7	11
12	6
14	4
16	2



A house-shaped grid with a red patterned roof and a yellow circle containing the number 19. The grid is a 4x2 table with numbers in various colors.

13	6
7	12
2	17
6	13



A house-shaped grid with a red patterned roof and a yellow circle containing the number 20. The grid is a 4x2 table with numbers in various colors.

15	5
13	7
8	12
16	4